

Name _____ Date _____



Identifying Three-Dimensional Figures

Independent Practice

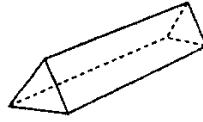
1 Draw a solid made of squares and rectangles.

2 I have 12 edges. I have 6 flat surfaces. Which shape am I? Draw it.

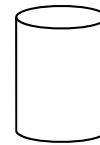



Name _____ Date _____

3 I could be sorted with a cylinder and a sphere. What 3-dimensional shape am I? Circle your answer.



4 I am made of 2 circles and a rectangle that is wrapped around with a circle at each end. I can roll. Circle your answer.



5 I am made of triangles and rectangles. What 3-D solid am I? Circle your answer.

