


 **Composing and Decomposing Two-Dimensional Figures**
Independent Practice


1 Draw a line to cut the parallelogram into 2 equal parts.



2 Draw 2 lines to cut the square into 4 equal parts.

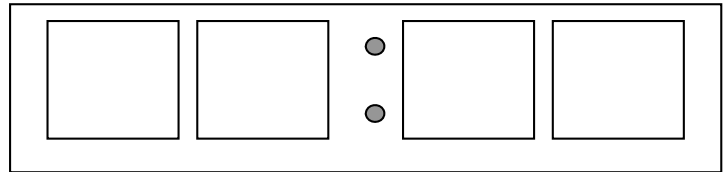



3 What 3 pattern blocks can you use to make this shape?



Name _____ Date _____

4 Draw the hands on the clock to show 7:30. Write the same time on the digital clock.



5 Draw a rectangle cut into 4 equal parts and another rectangle that is NOT cut into 4 equal parts.

