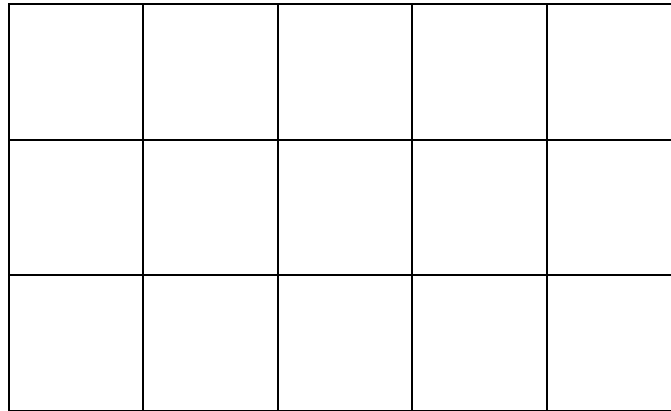




Measuring Area
Lesson Quiz

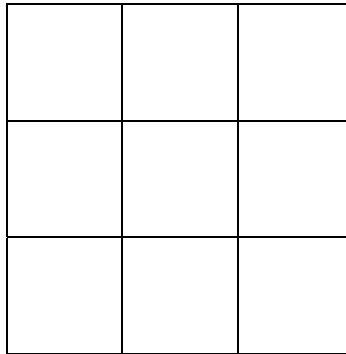
1. What is the area of the rectangle? Circle your answer.



- A. 5 square units
- B. 3 square units
- C. 15 square units
- D. 12 square units



2. What is the area of the square? Circle your answer.




- A. 3 square units
 - B. 9 square units
 - C. 6 square units
 - D. 8 square units
3. Sam has a rectangle with an area of 18 square units. He wants to make it 25 square units. How many more square units does he need to add? Circle your answer.
- A. 15 square units
 - B. 18 square units
 - C. 5 square units
 - D. 7 square units



4. Build a rectangle with your color tiles that is 8 units long and 2 units wide. What is the area? Circle your answer.

- A. 8 square units
- B. 16 square units
- C. 2 square units
- D. 24 square units

5. What is the area of the rectangle? Circle your answer.



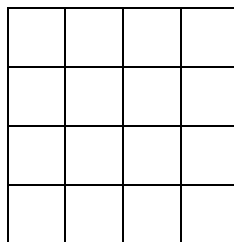
- A. 20 square units
- B. 25 square units
- C. 12 square units
- D. 14 square units



6. Build a rectangle with your color tiles that is 6 units long and 3 units wide. What is the area? Circle your answer.

- A. 8 square units
- B. 18 square units
- C. 12 square units
- D. 24 square units


7. What is the area of the square? Circle your answer.



- A. 25 square units
- B. 20 square units
- C. 12 square units
- D. 16 square units



8. What is the area of the figure? Circle your answer.



- A. 5 square units
- B. 20 square units
- C. 10 square units
- D. 14 square units

