

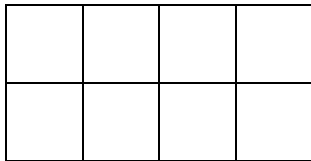


Measuring Area
Independent Practice – Activity Sheet

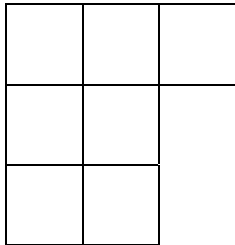
1 Draw a rectangle with an area of 8 square units.

2 Which shape has the greatest area?

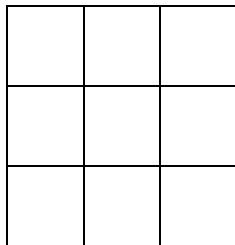
A.



B.

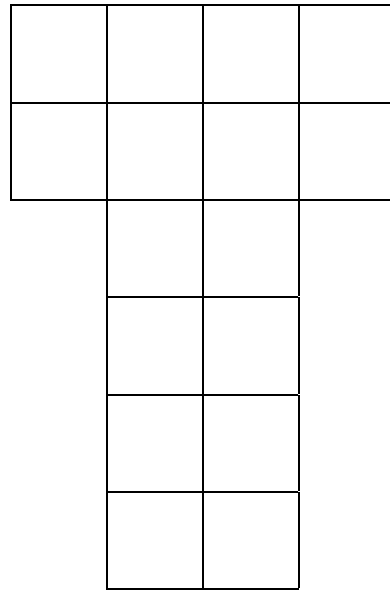


C.



Name _____ Date _____




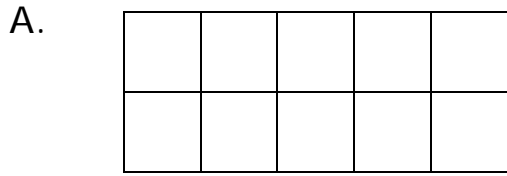
3 Julie covered this shape with her color tiles. What is the area of this shape?



_____ square units



4 The area of Sylvia's puppy's blanket is 15 square units.
Which shape has the same area?



Name _____ Date _____

5 Draw a shape with an area of 10 square units.

6 Draw a rectangle with an area of 12 square units.

