




**Measuring Area**  
*Evaluate Activity Sheet*

1. What is the area of the rectangle below?



2. What is the area of the rectangle below?



Name \_\_\_\_\_ Date \_\_\_\_\_

3. Jacobey used square tiles to cover the floor in his kitchen. He used 6 rows of tiles and there were 4 tiles in each row. How many tiles did Jacobey use? Circle your answer.

**A** 10 tiles

**B** 12 tiles

**C** 24 tiles

4. Marisela made a rug that was 3 feet wide and 5 feet long. What is the area of the rug?

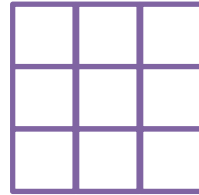
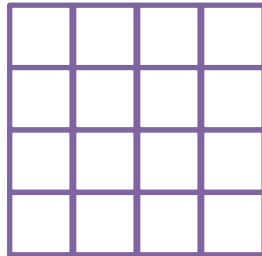
**A** 8 square feet

**B** 15 square feet

**C** 16 square feet



5. Noah made two dog houses. The floor of each dog house is shown below.



How much bigger is the first dog house than the second dog house? Circle your answer.

- A** 7 square units
- B** 9 square units
- C** 16 square feet

