

**Multiplying Whole Numbers***Evaluate – Answer Key*

- 1 Oddie plays basketball and in one game he makes 10 two-point shots. Which expression would show how many points Oddie actually scored?


A 10×1

B $10 + 2$

 C 10×2


D $10 - 2$

-
- 2 Abraham showed his table group a model of a number sentence using pencils. He arranged the pencils into the groups as shown below.



Which number sentence did Abraham show his table group?

A $4 + 3 = 7$

 B $4 \times 3 = 12$

C $12 - 4 = 3$

D $12 \times 3 = 36$



- 3 Mrs. Frable asked her class to write an expression that represented five times as much as 19. Look at the chart with student answers.


Samuel	$5 + 5$
Andy	$5 + 19$
Emma	5×5
Madeline	5×19

Which student wrote the correct expression?


A Samuel

B Andy

C Emma

 D Madeline

-
- 4 Darren read exactly 28 pages every night before he fell asleep. How many pages were in his book if he finished reading it in 4 days?

 A 112 pages

B 248 pages

C 56 pages

D 82 pages

-
- 5 Wallace opened 7 packages of party hats for his birthday. Each package contained 8 party hats? How many people will have party hats at Wallace's birthday party?

 A 56

B 78

C 49

D 15

